













Hvor mange?

Mål et område der er 20 x 20 cm (som dette kvadrat) og markér hjørnerne med pinde.
Hvor mange af hver plante og af hvert dyr kan du finde? Tegn og skriv:

	<hr/> <hr/> <hr/>		<hr/> <hr/> <hr/>
	<hr/> <hr/> <hr/>		<hr/> <hr/> <hr/>
	<hr/> <hr/> <hr/>		<hr/> <hr/> <hr/>
	<hr/> <hr/> <hr/>		<hr/> <hr/> <hr/>
	<hr/> <hr/> <hr/>		<hr/> <hr/> <hr/>